

# Block 13 - Capacitor Circuits and Energy

## Student Group

First Name	Surname	Matrikel Nr.

## Table of Contents

<b>Block 13 - Capacitor Circuits and Energy</b> .....	2
<i>Learning objectives</i> .....	2
<i>Preparation at Home</i> .....	2
<i>90-minute plan</i> .....	2
<i>Conceptual overview</i> .....	3
<i>Core content</i> .....	3
Series Circuit of Capacitor .....	3
Parallel Circuit of Capacitors .....	4
Energy in the electric Field .....	4
<i>Common pitfalls</i> .....	6
<i>Exercises</i> .....	6
Task 5.8.1 Calculating a circuit of different capacitors .....	6
Task 5.9.1 Layered Capacitor Task .....	6
Exercise 5.9.2 Further capacitor charging/discharging practice Exercise .....	7
Exercise 5.9.3 Further practice charging the capacitor .....	7
Exercise 5.9.4 Charge balance of two capacitors .....	7
Exercise 5.9.5 Capacitor with glass plate .....	8
<i>Embedded resources</i> .....	9

# Block 13 - Capacitor Circuits and Energy

## Learning objectives

After this 90-minute block, you can

- identify series vs. parallel connections of capacitors from a circuit diagram,
- compute equivalent capacitance  $C_{\text{eq}}$  for series  $\left(\frac{1}{C_{\text{eq}}} = \sum_k \frac{1}{C_k}\right)$  and parallel  $\left(C_{\text{eq}} = \sum_k C_k\right)$  networks,
- use the key sharing rules: in **series**  $Q_k = \text{const.}$  and voltages divide  $\left(U_k = \frac{Q}{C_k}\right)$ ; in **parallel**  $U_k = \text{const.}$  and charges divide  $\left(Q_k = C_k U\right)$ ,
- apply the capacitor divider relation (two series capacitors)  $U_1 = \frac{C_2}{C_1 + C_2} U, U_2 = \frac{C_1}{C_1 + C_2} U$ ,
- determine and check stored energy with  $W = \frac{1}{2} C U^2 = \frac{1}{2} Q U = \frac{Q^2}{2C}$ , including a dimensional check to  $\text{J}$ .

## Preparation at Home

Well, again

- read through the present chapter and write down anything you did not understand.
- Also here, there are some clips for more clarification under 'Embedded resources' (check the text above/below, sometimes only part of the clip is interesting).

For checking your understanding please do the following exercises:

- ...

## 90-minute plan

1. Warm-up (10 min):
  1. Quick quiz (2-3 items): series or parallel? which rule applies (constant  $U$  or constant  $Q$ )?
  2. Recall  $Q = C U$  and energy  $W = \frac{1}{2} C U^2$  (units).
2. Core concepts & derivations (35 min):
  1. Derive  $C_{\text{eq}}$  for **series** from Kirchhoff's voltage law and  $Q = \text{const.}$ ; derive voltage division  $U_k = \frac{Q}{C_k}$ .
  2. Derive  $C_{\text{eq}}$  for **parallel** from Kirchhoff's current/charge balance and  $U = \text{const.}$ ; obtain  $Q_k = C_k U$ .
  3. Energy in the electric field: integrate  $dW = U dq \rightarrow W = \frac{1}{2} C U^2$ ; short dimensional check.
3. Practice (35 min):
  1. Two short worked examples: mixed series/parallel network; two-capacitor divider with given  $U$  (find  $U_1$ ,  $U_2$ ,  $W$  on each).
  2. Short simulation tasks (use the two embedded Falstad circuits in this page): observe

$U_k$ ,  $Q_k$  when toggling the switch or changing values.

3. Mini-problems: "double a plate area / halve distance" reasoning on  $C$  and  $W$ .

4. Wrap-up (10 min):

1. Common-pitfalls checklist and one exit-ticket calculation.

## Conceptual overview

- What stays the same?** In **series** all capacitors carry the **same charge**  $Q$ ; in **parallel** all capacitors see the **same voltage**  $U$ .
- How do totals form?** Capacitances **add inversely** in series and **add directly** in parallel. This mirrors resistors but with the roles swapped.
- Voltage/charge sharing:** In series, the **smaller**  $C_k$  takes the **larger**  $U_k$  ( $U_k = Q/C_k$ ). In parallel, the **larger**  $C_k$  takes the **larger**  $Q_k$  ( $Q_k = C_k U$ ).
- Energy viewpoint:** Charging needs work against the field;  $W = \frac{1}{2} C U^2 = \frac{1}{2} Q U = \frac{Q^2}{2C}$ . Dimensional check:  $[C] = \text{F} = \frac{\text{A}\cdot\text{s}}{\text{V}}$ , so  $[C U^2] = \frac{\text{A}\cdot\text{s}}{\text{V}} \cdot \text{V}^2 = \text{A}\cdot\text{s}\cdot\text{V} = \text{J}$ .
- Design intuition:** Increasing plate area  $A$  or dielectric  $\epsilon_r$  raises  $C$  and thus stored  $W$  at the same  $U$ ; increasing gap  $d$  lowers  $C$ .

## Core content

### Series Circuit of Capacitor

If capacitors are connected in series, the charging current  $I$  into the individual capacitors  $C_1 \dots C_n$  is equal. Thus, the charges absorbed  $\Delta Q$  are also equal: 
$$\Delta Q_1 = \Delta Q_2 = \dots = \Delta Q_n$$

Furthermore, after charging, a voltage is formed across the series circuit, which corresponds to the source voltage  $U_q$ . This results from the addition of partial voltages across the individual capacitors. 
$$U_q = U_1 + U_2 + \dots + U_n = \sum_{k=1}^n U_k$$

It holds for the voltage  $U_k = \frac{Q_k}{C_k}$ .

If all capacitors are initially discharged, then  $U_k = \frac{\Delta Q}{C_k}$  holds. Thus 
$$U_q = \Delta Q \left( \frac{1}{C_1} + \frac{1}{C_2} + \dots + \frac{1}{C_n} \right) = \sum_{k=1}^n \frac{\Delta Q}{C_k} = \Delta Q \sum_{k=1}^n \frac{1}{C_k}$$

Thus, for the series connection of capacitors  $C_1 \dots C_n$  :

$$\frac{1}{C_{\text{eq}}} = \sum_{k=1}^n \frac{1}{C_k}$$

$$\Delta Q_k = \text{const.}$$

For initially uncharged capacitors, (voltage divider for capacitors) holds: 
$$Q = U_{\text{eq}} \cdot C_{\text{eq}} = U_k \cdot C_k$$

In the simulation below, besides the parallel connected capacitors  $C_1$ ,  $C_2$ ,  $C_3$ , an ideal

voltage source  $U_q$ , a resistor  $R$ , a switch  $S$ , and a lamp are installed.

- The switch  $S$  allows the voltage source to charge the capacitors.
- The resistor  $R$  is necessary because the simulation cannot represent instantaneous charging. The resistor limits the charging current to a maximum value.
- The capacitors can be discharged again via the lamp.

## Parallel Circuit of Capacitors

If capacitors are connected in parallel, the voltage  $U$  across the individual capacitors  $C_1 \dots C_n$  is equal. It is therefore valid:

$$U_q = U_1 = U_2 = \dots = U_n$$

Furthermore, during charging, the total charge  $\Delta Q$  from the source is distributed to the individual capacitors. This gives the following for the individual charges absorbed:

$$\Delta Q = \Delta Q_1 + \Delta Q_2 + \dots + \Delta Q_n = \sum_{k=1}^n \Delta Q_k$$

If all capacitors are initially discharged, then  $Q_k = \Delta Q_k = C_k \cdot U$

$$\Delta Q = Q_1 + Q_2 + \dots + Q_n = \sum_{k=1}^n Q_k \\ \Delta Q = C_1 \cdot U + C_2 \cdot U + \dots + C_n \cdot U = \sum_{k=1}^n C_k \cdot U \\ \Delta Q = \sum_{k=1}^n C_k \cdot U$$

Thus, for the parallel connection of capacitors  $C_1 \dots C_n$ :

$$C_{\text{eq}} = \sum_{k=1}^n C_k \\ U_k = \text{const.}$$

For initially uncharged capacitors, (charge divider for capacitors) holds:

$$\Delta Q = \sum_{k=1}^n Q_k$$

$$\frac{Q_k}{C_k} = \frac{\Delta Q}{C_{\text{eq}}}$$

In the simulation below, again, besides the parallel connected capacitors  $C_1$ ,  $C_2$ ,  $C_3$ , an ideal voltage source  $U_q$ , a resistor  $R$ , a switch  $S$ , and a lamp are installed.

## Energy in the electric Field

Now we want to see how much energy is stored in a capacitor during charging. When we want to charge a capacitor charges have to be separated (see [figure 1](#)). This gets more and more difficult as more charges were moved, since these already moved charges create an electric field.

Fig. 1: summary of electrostatics



We already had a first look onto the energy in the electric field in [block09](#).

There, we got:

$$\begin{aligned} \Delta W &= \int \vec{F} \cdot d\vec{r} \quad \&= q \int \vec{E} \cdot d\vec{r} \quad \&= q \int U \quad dW \\ &= dq \int U \end{aligned}$$

Now, For a capacitor we include the formula for the capacitor  $C = \frac{q}{U}$ , or better its rearranged version  $U = \frac{q}{C}$ :

$$\begin{aligned} dW &= dq \int \frac{q}{C} \quad \int dW = \int \frac{q}{C} dq \end{aligned}$$

Here we again see, that the needed energy portion  $dW$  to move a portion  $dq$  is also related to the already moved charges  $q$ .

To get the energy  $\Delta W$  needed to move all of the charges  $Q = \int dq$  we have to integrate from  $0$  to  $Q$ :

$$\begin{aligned} \Delta W &= \int_0^Q dW \quad \&= \int_0^Q \frac{q}{C} dq \quad \&= \\ \frac{1}{2} \frac{Q^2}{C} \quad \end{aligned} \quad \begin{aligned} \Delta W &= \\ \frac{1}{2} \frac{Q^2}{C} &= \frac{1}{2} QU = \frac{1}{2} CQ^2 \end{aligned}$$

## Common pitfalls

- Mixing up the rules: writing  $C_{\text{eq}} = C_1 + C_2$  for **series** (wrong) or  $\frac{1}{C_{\text{eq}}} = \frac{1}{C_1} + \frac{1}{C_2}$  for **parallel** (wrong).
- Forgetting which quantity is equal: **series**  $\rightarrow Q_k = \text{const.}$ , **parallel**  $\rightarrow U_k = \text{const.}$ .
- Applying the **resistive** voltage divider  $U_1 = \frac{R_1}{R_1 + R_2} U$  to capacitors. For capacitors in series it inverts:  $U_1 = \frac{C_2}{C_1 + C_2} U$ .
- Ignoring **initial charge states**: pre-charged capacitors reconnected will redistribute charge; use charge conservation on isolated nodes before using  $Q = C \cdot U$ .
- Dropping units or mixing forms of energy: always keep  $W = \frac{1}{2} C U^2 = \frac{1}{2} Q U = \frac{Q^2}{2C}$  and check  $J$ .

## Exercises


### Task 5.8.1 Calculating a circuit of different capacitors

See <https://www.youtube.com/watch?v=vSeSHampd4Y>


### Task 5.9.1 Layered Capacitor Task



### **Exercise 5.9.2 Further capacitor charging/discharging practice Exercise**



### **Exercise 5.9.3 Further practice charging the capacitor**



### **Exercise 5.9.4 Charge balance of two capacitors**



### Exercise 5.9.5 Capacitor with glass plate

Fig. 2: Structure of a capacitor with glass plate




Two parallel capacitor plates face each other with a distance  $d_K = 10 \text{ mm}$ . A voltage of  $U = 3000 \text{ V}$  is applied to the capacitor. Parallel to the capacitor plates, there is a glass plate ( $\epsilon_r = 8$ ) with a thickness  $d_G = 3 \text{ mm}$  in the capacitor.

1. Calculate the partial voltages  $U_G$  in the glass and  $U_A$  in the air gap.
2. What is the maximum thickness of the glass pane if the electric field  $E_0 = 12 \text{ kV/cm}$  must not exceed?

## Embedded resources

The equivalent capacitor for series of parallel configuration is well explained here



From:  
<https://first.mexle.te.hs-heilbronn.de/> - **MEXLE Wiki**

Permanent link:  
[https://first.mexle.te.hs-heilbronn.de/electrical\\_engineering\\_and\\_electronics\\_1/block13?rev=1762102074](https://first.mexle.te.hs-heilbronn.de/electrical_engineering_and_electronics_1/block13?rev=1762102074)

Last update: **2025/11/02 17:47**

