

Inverting Operational Amplifier

Student Group

First Name	Surname	Matrikel Nr.

Table of Contents

Inverting Operational Amplifier	2
Gain of Op-Amp	2
Analysis of inverting input currents	3
Analysis of inverting input voltages	4

Inverting Operational Amplifier

Gain of Op-Amp

Build the following circuit in [figure 1](#) with the power supply and a multimeter.



Fig. 1: Inverting Op-Amp

$U_{DD} = 10\text{ V}$, $U_{SS} = -10\text{ V}$, $R_1 = 10\text{ k}\Omega$

Calculate the necessary value for R_2 , so that the output U_{OUT} is $+5\text{ V}$. Use the supply voltage of the operational amplifier for U_{IN} .

$U_{IN} =$

$R_2 =$

Analysis of inverting input currents

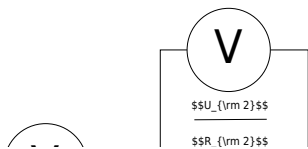


Fig. 2: Inverting Op-Amp: Analysis of currents of the inverting input

$$U_{\text{DD}} = 10\text{V}, U_{\text{SS}} = -10\text{V}, R_1 = 10\text{k}\Omega$$

Use the values from [figure 1](#) for $U_{\text{IN}}, U_{\text{OUT}}, R_2$.

Complete the reference arrows in the schematic of the circuit.

Determine the the currents I_1 and I_2 indirectly by measuring the voltage across known resistors

and calculate the algebraic sum of the currents at node N_{12} using Kirchhoff's Current Law (KCL).

$$U_1 =$$

$$U_2 =$$

$$I_1 =$$

$$I_2 =$$

$$I_{N12} =$$

Analysis of inverting input voltages

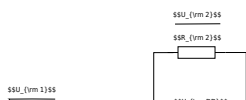


Fig. 3: Inverting Op-Amp: Analysis of virtual GND of the inverting input

$$U_{DD} = 10\text{V}, U_{SS} = -10\text{V}, R_1 = 10\text{k}\Omega$$

Use the values from figure 1 for U_{IN}, U_{OUT}, R_2 .

Complete the reference arrows in the schematic of the circuit.

Take the values for U_1, U_2, U_{OUT} from figure 2.

Calculate the voltage U_{12} using Kirchhoff's Voltage Law (KVL) within the circuit loop.

Verify your calculated result by measuring U_{12} .

$$U_1 =$$

$$U_2 =$$

$$U_{OUT} =$$

$$\text{Calculated } U_{12} =$$

$$\text{Measured } U_{12} =$$

Analyse the physical significance of the potential at N_{12} relative to GND (defined as U_{12}) in the context of the operational amplifier's input configuration. What do you observe?

$\{\text{rm}\}$

$\{\rm \dots\}$

$\{\rm \dots\}$

$\{\rm \dots\}$

$\{\rm \dots\}$

$\{\rm \dots\}$

$\{\rm \dots\}$

$\{\rm \dots\}$

$\{\rm \dots\}$

$\{\rm \dots\}$

$\{\rm \dots\}$

$\{\rm \dots\}$

What happens if you short-circuit R_2 (the feedback resistor)?
Experimentally verify this effect and explain the observed behavior regarding the output voltage.

$\{\rm \dots\}$

$\{\rm \dots\}$

$\{\rm \dots\}$

$\{\rm \dots\}$

$\{\rm \dots\}$

$\{\rm \dots\}$


$\{\rm \dots\}$

$\{\rm \dots\}$

$\{\rm \dots\}$

$\{\rm \dots\}$

$\{\rm \dots\}$



From:

<https://first.mexle.te.hs-heilbronn.de/> - **MEXLE Wiki**

Permanent link:

https://first.mexle.te.hs-heilbronn.de/lab05_en/inverting_op-amp_basics_amplification?rev=1777933307

Last update: **2026/05/05 00:21**

