

# Photodiode as current source

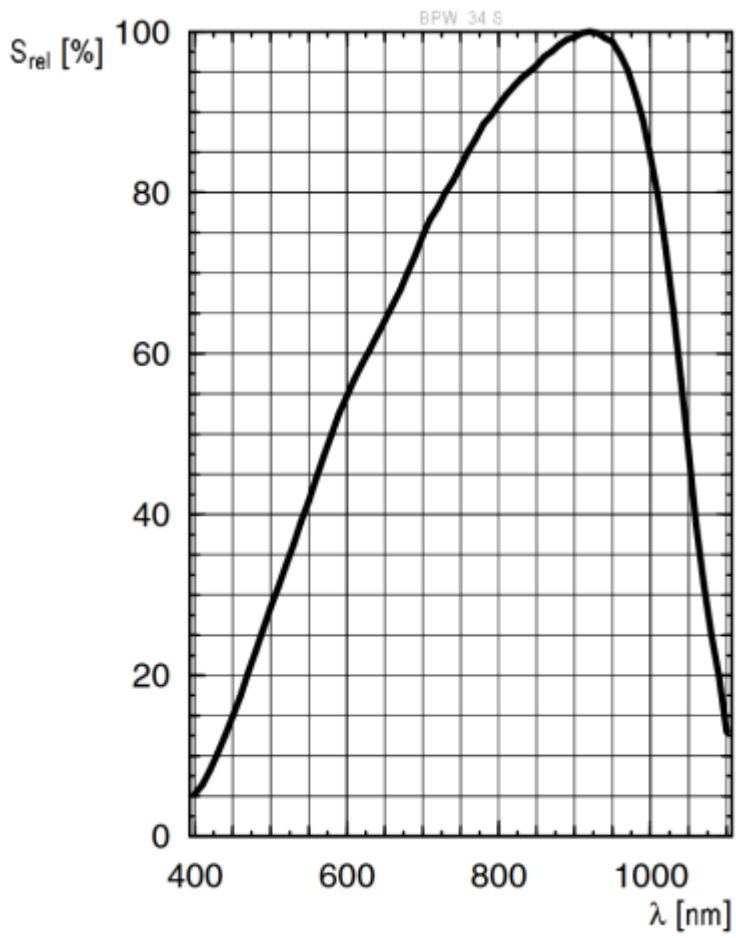
## Student Group

First Name	Surname	Matrikel Nr.

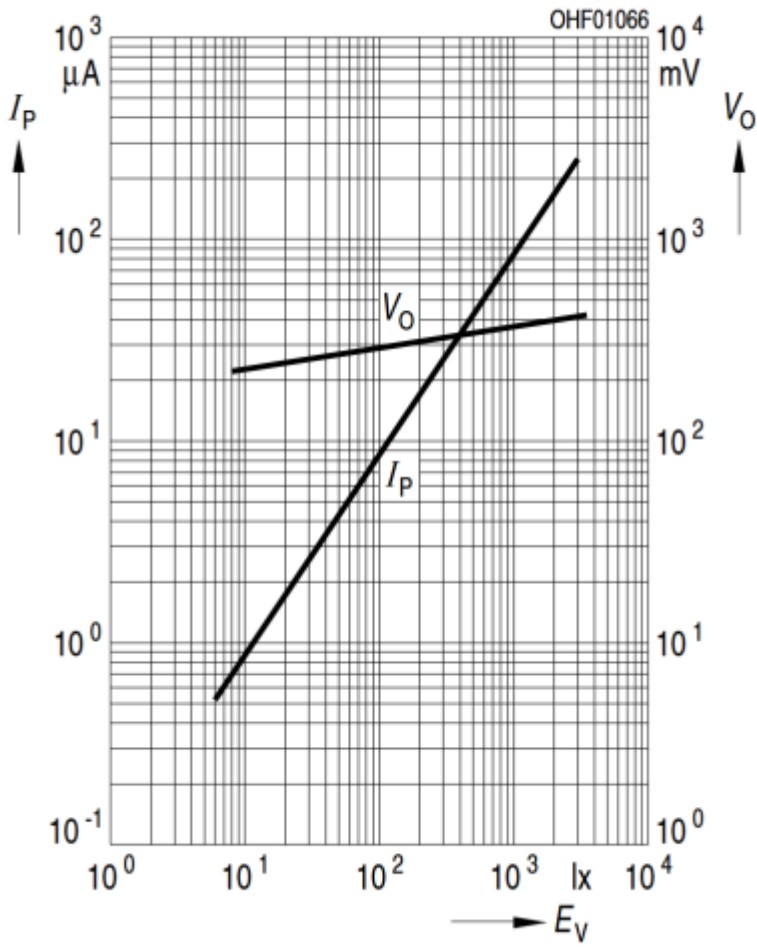
## Table of Contents

Photo Diode as current source ..... 2

### Photo Diode as current source



$$I_P (V_R = 5 \text{ V}) / V_O = f(E_V)$$



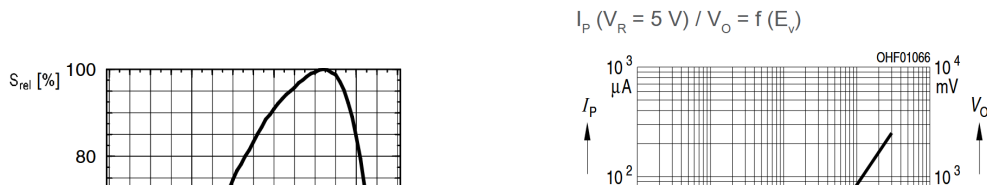


Fig. 3: Inverting Op-Amp: Photo Diode as current source

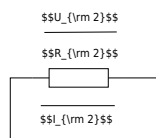


Fig. 4: Inverting Op-Amp: Photo Diode as current source

$$U_{DD} = 10V, U_{SS} = -10V$$

Complete the arrows in the schematic of the circuit.

Take the values for  $U_1, U_2, U_{OUT}$  from figure ##.

Use these values to calculate the sum of the voltages at node  $N_{12}$ .

Compare your result by measurement.

$$U_1 =$$

$$U_2 =$$

$$U_{OUT} =$$

$$\text{Calculated } U_{12} =$$

$$\text{Measured } U_{12} =$$

What are your results?

{rm .....}

{rm .....}

{rm .....}

What will happen if you short-circuit  $R_2$ ?

Try it and explain your results.

{rm .....}

{rm .....}

{rm .....}

{rm .....}

{rm .....}

{rm .....}

$\{\rm \dots\}$

$\{\rm \dots\}$

$\{\rm \dots\}$

$\{\rm \dots\}$

$\{\rm \dots\}$

From:  
<https://first.mexle.te.hs-heilbronn.de/> - MEXLE Wiki

Permanent link:  
[https://first.mexle.te.hs-heilbronn.de/lab05\\_en/inverting\\_op-amp\\_photo\\_diode\\_as\\_current\\_source?rev=1776154053](https://first.mexle.te.hs-heilbronn.de/lab05_en/inverting_op-amp_photo_diode_as_current_source?rev=1776154053)

Last update: **2026/04/14 10:07**

